


Greg Tang's Summer Math Fun!

Summertime!

Play Coin Bubble	Play NumTanga Level 1, 2, & 3	Play How Much How Many	Complete Tangy Tuesday Puzzle Pack
Play BreakApart Make 10 (easy level)	Play Missing (-) Combo (easy level)	Play Ten Frame Mania	Play Kakooma + (Play or Compete 6)
Play Expresso 3 Number (+ -)	Read & Play Math Appeal	Play Math Limbo (Learn Mode)	



Go to level 4!



- Find games and activities at www.GregTangMath.com
- Play each game for 15 minutes
- Try to complete each level with no errors
- Play the harder levels if activities are too easy
- Move to the previous game board if you get stuck
- Get help from an adult or family member
- Sign up to win prizes for each level you complete

Level 3 Game Board
www.GregTangMath.com

TANGY TUESDAY PUZZLE PACK

Fun brain puzzles that make you smarter!

Numskill™
ADDITION
Name: _____
In each box, look for ADDITION

NumTanga™
NUMBERS TO 20
Name: _____
In each box, look for a number

DigiCross™
3RD GRADE
Name: _____
greater width rhombus perimeter ninety area twelve sixty tens thirds

Takooma®
3 PLUS
Name: _____
Puzzled? In each 5-number pentagon, find the number that is the sum of the other four numbers. Create 1 final puzzle and solve.

Arithmetic Problems:

+24	
	-27
+16	
+4	
+47	
	+9
-67	
13	
-23	

ACROSS

- 5/9 is ___ than 5/10
- quadrilateral with equal sides
- 4 sixths is the same as 2 ___
- 84 days is ___ weeks
- rectangle's area: length x ___

DOWN

- space inside a shape
- length around a shape
- $6 \times 15 = \underline{\quad}$
- $9 \times 80 = 72 \underline{\quad}$
- round 57 to nearest 10

© 2016 Gregory Tang. All rights reserved. store.gregtangmath.com


Math Centers
Teaching Activities
Homework
Early Finishers
Fun Reward Games

Created by

GREG TANG MATH

store.gregtangmath.com

**GRADE
2**



greater ninety-nine four fifteen twenty eight quarter hundreds fifty meter

ACROSS

- 2. 2 quarters = ____ ¢
- 4. one of 4 equal parts
- 8. $50 + 30 + 19$
- 9. 1 ____ is longer than 1 centimeter
- 10. 459 is ____ than 338

DOWN

- 1. $14 - 6$
- 3. $819 = 8 \text{ ____} + 1 \text{ ten} + 9 \text{ ones}$
- 5. $627 = 600 + \text{ ____} + 7$
- 6. 3 rows of 5 cans are ____ cans
- 7. ____ + 8 = 12

Snake

2.1.10

Name: _____

Licensed to:


store.gregtangmath.com © 2016 Gregory Tang

Fill in each blank box in order, combining the numbers from the previous two boxes.


19	-3		-5		-7		+16	
								-19
	+13		+3		-8		+9	
-6								
	-4		-1		-1		+11	17


4		+13			-3	
+9		-16		-9	+8	+10
-6		+8		+1	-9	+2
	+2				+6	
						20


In each empty box, write the matching value between adjacent cards.


28	10+9
	fifteen


19


12	10+4
	nineteen


16	10+7
	twenty eight


29	10+3
	seventeen

17	10+1
	twenty four

18	20+9
	eleven

13	20+8
	fourteen

21	20+4
	twenty nine

19	20+1
	eighteen

Kakooma[®] Plus

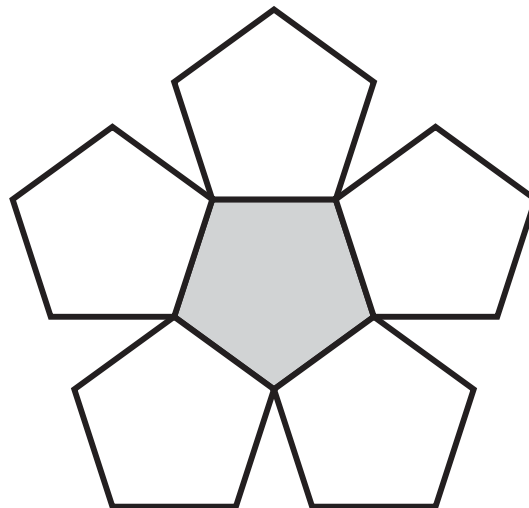
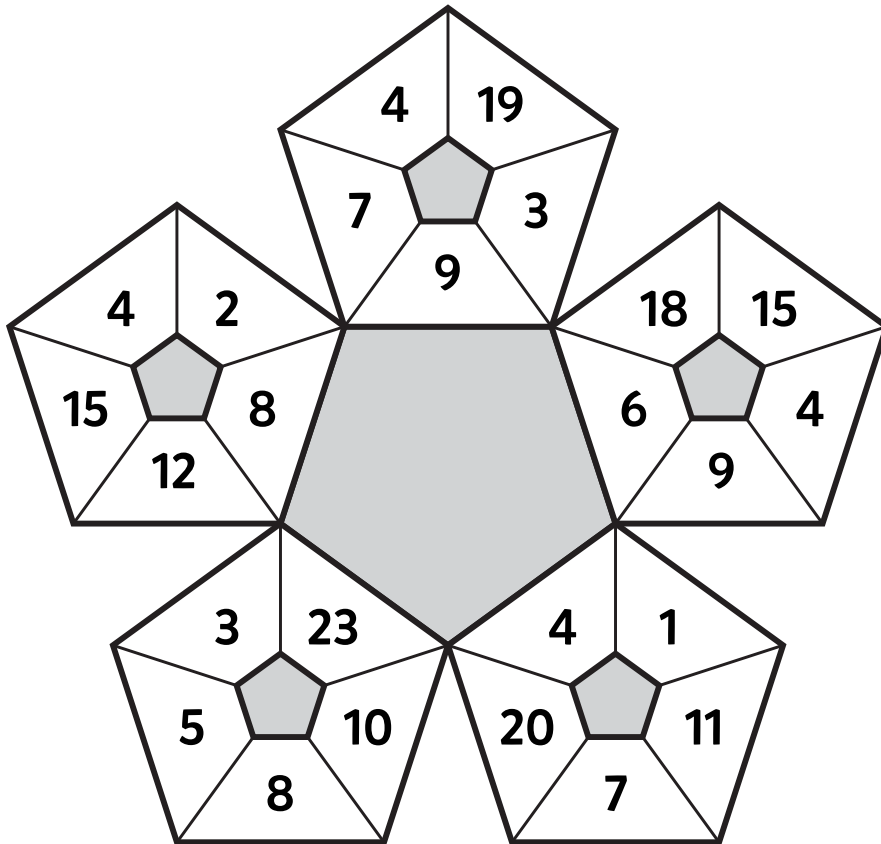
2.1.10

Name: _____

Licensed to:

store.gregtangmath.com © 2016 Gregory Tang

Puzzled? In each 5-number pentagon, find the number that is the sum of 2 other numbers. Use all 5 sums to create 1 final puzzle and solve.



Final
answer:

Fill in the empty boxes to make every horizontal and vertical equation correct. Use the correct order of operations and read left to right and top to bottom. Use every number in the number bank once.

NUMBER BANK

1 2 3 3 4 4 5 5

4	=		-	2	+	
+		-		=		=
	+	3	=		+	1
=		+		-		+
	+		=	1	+	5
+		=		-		-
	+		=	2	+	5